


How many chocolate chips are

Circle the

in the cookies?




correct Number



3

1

8



4

9


2



3

7

5



0

4

6



10

2

5